

RPS, BOKARO
MODEL TEST PAPER, 2014-15

Class - L.K.G.
Subject - Maths

A. Tick (\checkmark) the correct option:

1. Tick (\checkmark) the longer object :




2. Tick (\checkmark) the biggest and cross (X) the smallest thing:






3. After :



4. Count and write





5. Numbers name:

11 - _____ 9 - _____

6. Fill in the missing numbers

21			24				28				
----	--	--	----	--	--	--	----	--	--	--	--

7. What comes in between :

29 31 41 43

8. Additions: (+)

$$\begin{array}{r} 4 \\ + 2 \\ \hline \end{array}$$

$$\begin{array}{r} 3 \\ + 1 \\ \hline \end{array}$$

$$\begin{array}{r} 1 \\ + 1 \\ \hline \end{array}$$

$$\begin{array}{r} 3 \\ + 3 \\ \hline \end{array}$$

9. Put the correct sign > , < or =

9 _____ 12 16 _____ 11 30 _____ 27 6 _____ 3

10. Before:

_____ 16 _____ 13 _____ 7 _____ 2

11. Subtraction :

$$\begin{array}{r} 3 \\ - 1 \\ \hline \end{array}$$

$$\begin{array}{r} 5 \\ - 1 \\ \hline \end{array}$$

$$\begin{array}{r} 2 \\ - 1 \\ \hline \end{array}$$

$$\begin{array}{r} 4 \\ - 2 \\ \hline \end{array}$$

12. Matching:



13. Colour the biggest number:




14. Circle the correct number:

Eight - 8 6 3 5
 Twelve - 7 11 12 16


15. Complete the same pattern :




16. Encircle the objects to make the group equal :




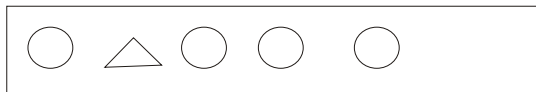
17. Match the object with their numbers;



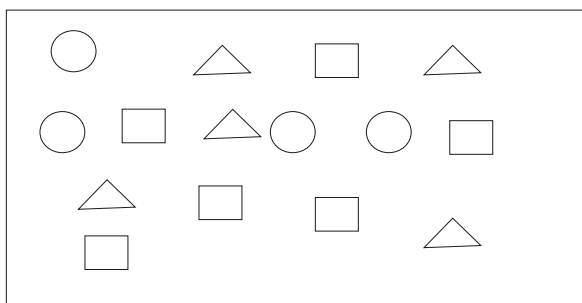
22 18
 16 13



18. Cross the odd picture



19. Count and colour the shape



Circle - _____
 Square - _____
 Triangle - _____