

ROYAL PUBLIC SCHOOL  
SECTOR - IV, B.S. CITY  
Model test paper

Choose the correct (✓) option:

1. Which of the following is a correct match?

- (20) Twelve    (26) Twenty six    (37) Thirty seven

2. If I add this number to 10, I will get 10, What am I adding?


$$10 + \square = 10$$

1

2

0

3. There are 6



brush.

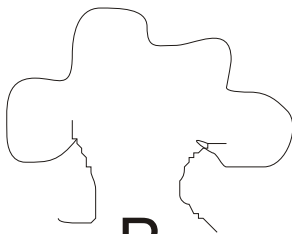
How many are left?

3

4

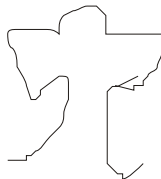
7

4. Which tree is taller than P?



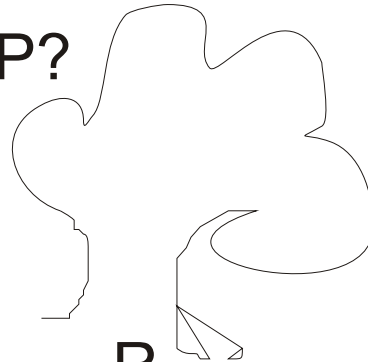
P

R



Q

Q



R

P

5. Which activity can be done in 1 minute? Painting a wall ?

Painting a wall

going to school

sharpening a pencil

6. How much money is show?

50 P

Rs. 1

Rs. 1

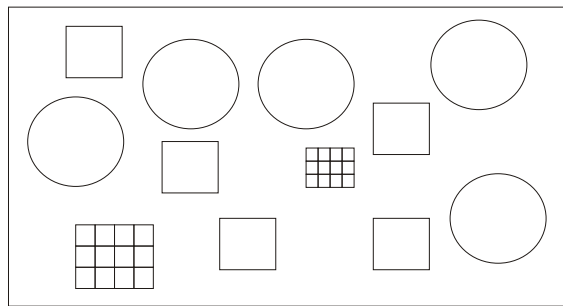
Rs. 20

Rs. 20 and 50 p.

Rs. 22 and 50 p.

Rs. 30

7. How many circle are there in the box?



5

6

4

8. What is the 8th month of a year?

October

July

August

9. Which day comes just after Tuesday?

Thursday

Wednesday

Friday

10. If one pencil costs Rs. 10, How much Rahul needs to pay for 3 pencils?

Rs. 35

Rs. 40

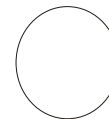
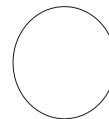
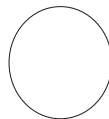
Rs. 30

II. Continue the pattern

78

80

82



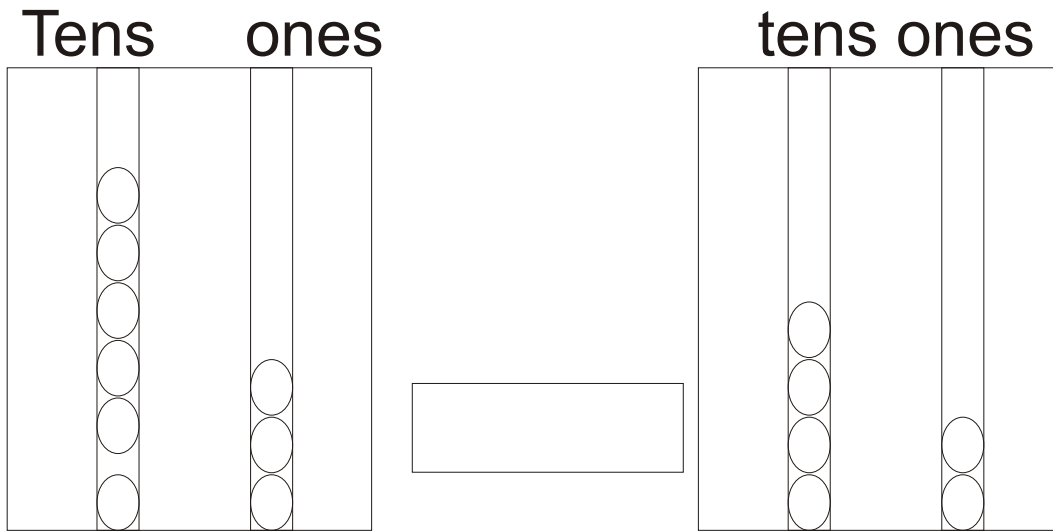
85

84

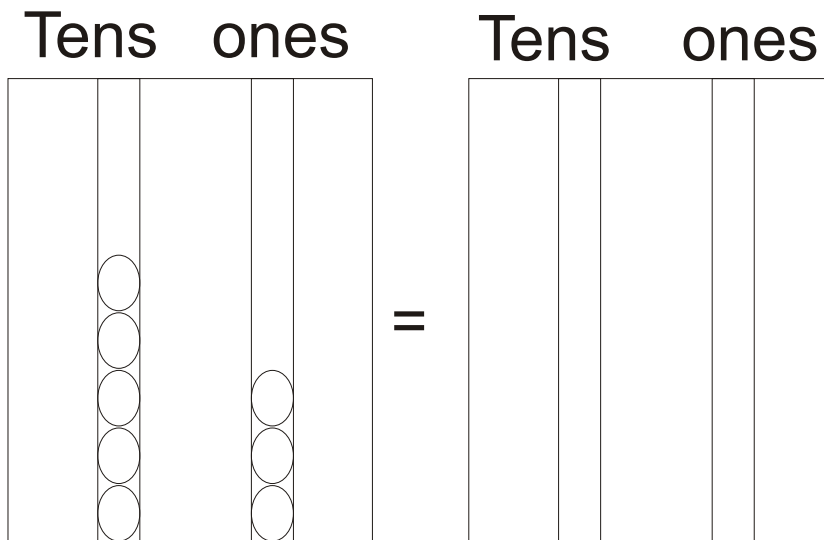
82



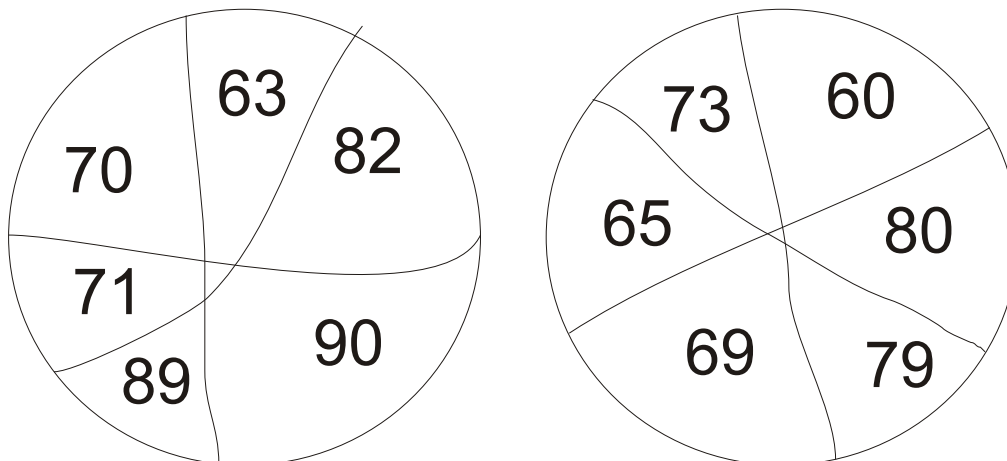
3. Write  $<$  or  $>$  :



4. Draw beads :



5. Colour as shown smallest yellow, largest pink.



6. Tick the correct answer:

10 x 9      (80)      (90)      (70)

3 X 5      (36)      (21)      (15)

2 X 9      (20)      (18)      (32)

8. Write in words:

135 .....

214 .....

b. Write in numerals:

One hundred and twenty -nine

Two hundred and forty - one

7. Fill in the correct answer:

a year has ..... Months. (13/12)

a week has ..... Days. (7/8)

a day has ..... Hours. (26/24)

.....is the first month of a year.

(January / February)

Saturday is the ..... Day of a week.(last/first)

8. Arrange the numbers in increasing order:

176      278      234 .....

215      89      172 .....

9. Arrange the number in decreasing order:

276, 197, 242 .....

187 178 213 .....

10. Fill in the blanks:

25 paise + 50 paise = ..... Paise.

20 Rupees + 50 Rupees = ..... Rupees

11. Write in expanded form.

165 = .....

178 = .....

12. Write in the short form:

100 + 30 + 2 = .....

100 + 90 + 3 = .....

13. Fill in the blanks:

15 ÷ 5 = ..... 21 ÷ 7 = .....

14. Word Problems:

a. There are 23 monkeys on a tree and 25 birds on another tree. How many animals on trees?

- B. A Class has 25 children. On a rainy day 14 children were absent. How many children were present on that day?

- C. A man has 2 ears. 5 men have?

$$X =$$

- d. 4 Children share 24 marbles equally. How many marbles does each child get?

=

marbles

15. Tick the correct answer:

1 hundred + 3 tens + 3 ones =  96  143  133  85

1 hundred + 0 tens + 7 ones =  107  110  59  109

2 hundred + 0 tens + 0 ones =  100  200  109  130