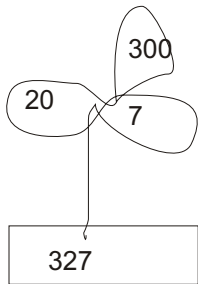


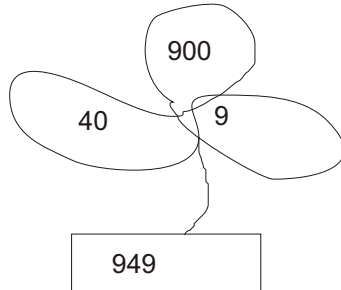
Class - II Name-
Subject. - Maths

A. Choose the () correct option:

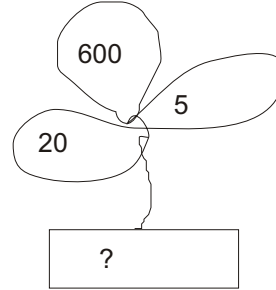
1. Which of the following replaces? In the given below number bonds?



256



625



652

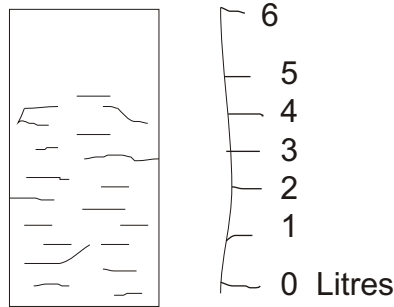
2. How many ten's are there in the sum of 40 and 30?

8 tens

70 tens

7 tens

3. How many litres of water does the bottle contain?



3 litres

2 litres

6 litres

4. Raju watched his favourite television programme "Tom Jerry" from 5 PM to 6:30 How long did the programme last?

2 hrs.

1:30 hrs.

2:30 hrs.

5. How many Rs. 5 you need to make Rs. 25?

5

6

7

6. 9, 8, 27, 36, 45, -----

51

44

54

7. If today is Sunday, then what day was just before yesterday?

Monday

Saturday

Friday

8. Megha bought 7 notebooks. Each had 64 pages. What is the total number of pages in all the notebooks?

448

458

378

9. Which of the following is reverse arrangement of alphabets of the given word

OLYMPIAD

Diapmylo

Diapmylo

Daimpylo

10. The sum of Rs. 15 and Rs. 30 is _____

Rs. 35

Rs. 55

Rs. 45

B. Colour the correct answers:

3 2 9

3 3 1

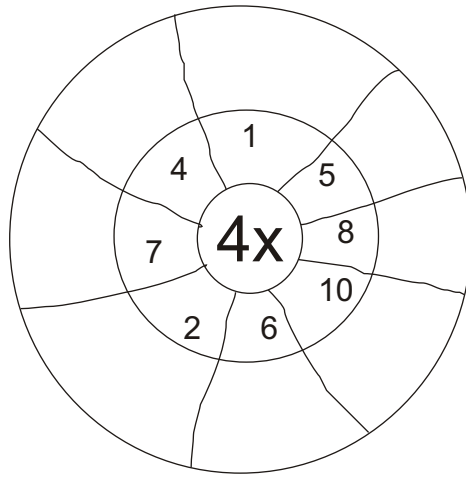
- 1 1 0

- 3 1 1

2 1 9

3 1 1

C. Fill in the blanks:



D. Fill in the blanks the expanded form of numbers:

Two hundred and thirty two=

Four hundred and fifty-five=

E. Fill in the blanks:

a. 1 Rupee = paise

b. Two 50 paise coins = Rupee

c. 2 Days = hours

d. A clock has hands.

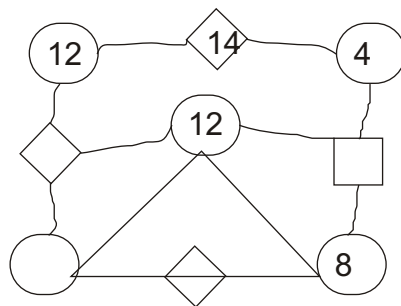
e. 100 rupees = 50 Rupees Note.

F. Write the number name for the following numerals:

1. 456

2. 284

G. Fill in so that the sum of each line is 30. This makes a magic Square.



H. Fill in the blanks:

50 paise + 25 paise + 10 paise = _____ paise

20 Rupees + 10 Rupees + Rupees= _____ Rupees

62 Rupees = 50 Rupees + 10 Rupees + _____ Rupees

100 Rupees + 50 Rupees + 10 Rupees = _____ Rupees.

I. Put > or < in the box :

423 100

394 439

I. Rearrange these numbers in ascending order.

706, 670, 607 760 577 =

617 716 96 176 167 =

J. Rearrange these numbers in descending order.

593 395 359 396 319 =

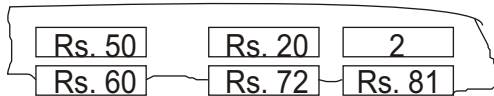
531 315 351 153 135 =

K. Fill in : $16 \div 2 =$

$35 \div 7 =$

$24 \div 6 =$

L. How much money in all? Colour the correct answer:



M. Draw the hands to show the time :

